

**Vatsalya Sr.Sec. School Vidisha**  
**Academic Planner April 2020**  
**Class VI**

## English

Read chapter no 1 and poem no 1. Find at least 20 difficult words and their meanings and write down in any copy. Find answers of these chapters from NCERT and solution app(download this app). Write and learn answers. Complete book exercises

### Activity-

1. Write a diary what you are doing during the lock down period.
2. Make a dish by cooking without flame method and write its recipe.

**Name:** \_\_\_\_\_ **Date:** \_\_\_\_\_

**Nouns Worksheet (Circling) [ELA-Literacy.L.3.1a](#)**

A noun is a word that names a person, place, thing or idea.

Directions: Circle the noun or nouns in each sentence given below.

*Example A- We rented a cabin to stay the night.*

*Answer- we, cabin, night*

1. My alarm went off loudly in the morning.
2. I love the month of April because the flowers bloom.
3. My body ached after I played three hours of basketball.
4. We saw a deer run across the road!
5. The forest had many beautiful trees and animals.
6. We saluted the flag every morning in class.
7. My parents went to vacation on an island.
8. Next month will be my birthday.
9. I opened my mail when I got home from school.
10. The package at the door was heavy.
11. My friends and I went swimming in the stream.

## Pronoun Practice 1

Fill in the blanks with the correct pronouns. Then write the antecedent of each pronoun in the column on the right.

<i>Example</i>	Everyone should do <u>his or her</u> best.	<i>Antecedent</i> <u>everyone</u>
1.	Each winner thanked _____ sponsors.	_____
2.	If a student enrolls in a reading course, _____ must complete the lab assignments.	_____
3.	Ana injured _____ right foot.	_____
4.	Anyone can become a good cook if _____ takes Sam's cooking class!	_____
5.	Tom's neighbors sometimes leave _____ garage door open.	_____
6.	Each of the students wanted _____ grade to be changed.	_____
7.	No one remembered to bring _____ keys.	_____
8.	The city council discussed _____ budget.	_____
9.	The team has chosen _____ captain.	_____
10.	The class officers brought _____ proposals.	_____

## Social Science

### History

- (1) Read chapter 1 of history .when ,where and how.
- (2) Find out the glossary from the chapter and write it in your copy.
- (3) Question which has given at the end of the chapter write their answer with the help of NCERT and SOLUTION app( or any other app like e pathshala,diksha atc)
- (4) Learn all the question answer.

**Geography** Read chapter 1.search key words & write down in note book.fill exercise.

## **GEOGRAPHY ASSIGNMENTS**

### **Chapter :**                      **The Earth In The Solar System**

- I     Define the following terms:-
- |                     |              |
|---------------------|--------------|
| a) Orbit-           | d) Satellite |
| b) Meteoroids       | e) Comets    |
| c) Celestial bodies |              |
- II    Give one word answers:-
- a) Blue planet of the solar system
  - b) The largest planet of our solar system
  - c) Another name for Milkyway
  - d) The two planets between which the Saturn lies.
  - e) The smallest planet in the solar system
  - f) Constellation that helps us locate the Pole Star.
- III   Indicate if the statements are True or False:-
- a) Asteroids are thought to be pieces of a large planet which exploded
  - b) The sun is the biggest star in the universe
  - c) Planets move around the sun in circular orbits
  - d) The solar system consists of the sun and the eight planets
  - e) Uranus has the most number of satellites in our solar system
  - f) Hydrogen and helium gases are found on the sun.
- IV   Name all the planets according to their size.
- V    Why is Earth known as 'Blue Planet'?
- VI   Match the following:
- | Column - A                               | Column - B |
|--|------------|
| 1. The star nearest to earth             | a. Moon    |
| 2. Planet with the largest orbit         | b. Saturn  |
| 3. Red planet                            | c. Sun     |
| 4. Celestial body closest to earth       | d. Mars    |
| 5. Planet surrounded by prominent rings. | e. Neptune |

=====

**Chapter :** **Globe - Latitude and Longitude**

I Define the following terms :-

- a) Equator
- b) Axis
- c) Greenwich Mean Time
- d) Arctic Circle
- e) Geoid

II Fill in the blanks :-

- a) Lines of latitudes are also called \_\_\_\_\_.
- b) The \_\_\_\_\_ zone is neither too hot nor too cold.
- c) \_\_\_\_\_ is a model of the earth.
- d) The sun's rays fall \_\_\_\_\_ over every place within the Torrid zone.
- e) Frigid zone lies beyond \_\_\_\_\_ in both the hemispheres.

III Indian standard time is 5½ hours ahead of London time – Keep this in mind and calculate :-

(a) G.M.T	Time in India	(b) IST	Time in London
8 AM		1.30 PM	
11.30 AM		5.30 PM	
6 PM		6 AM	

IV Answer the following questions:

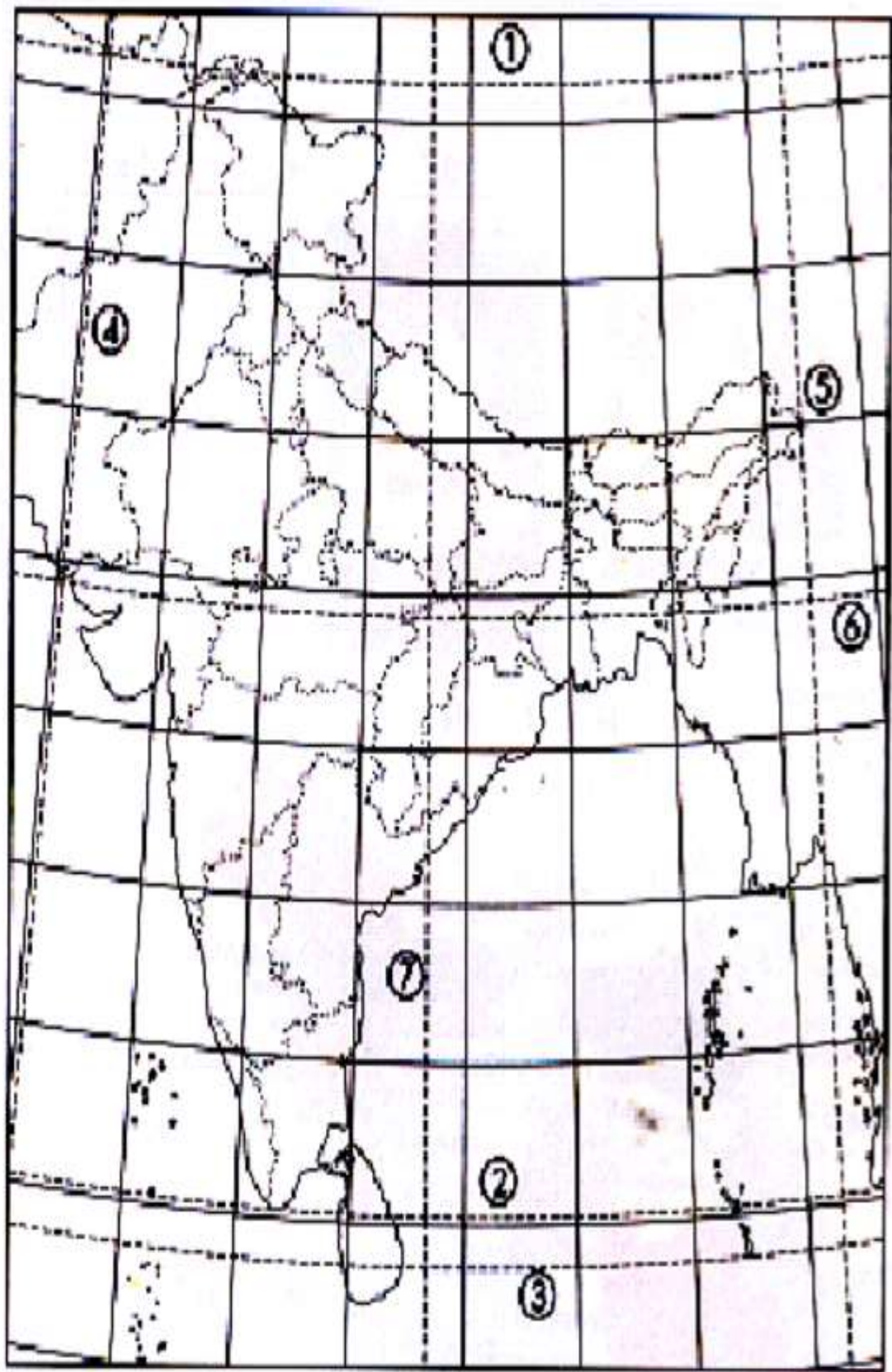
- a) How are meridians numbered?
- b) When would the local time of a 'place A' be ahead of 'place B'?

V Distinguish between:

- a) Latitudes and Longitudes
- b) Local time and Standard time.

VI Explain the heat zones of the earth with the help of a diagram.

VII On the given outline map label the numbered latitudes and longitudes from 1 to 7.



# SCIENCE

Read chapter 1. search key words & write down in note book . fill exercise.

## Activities.

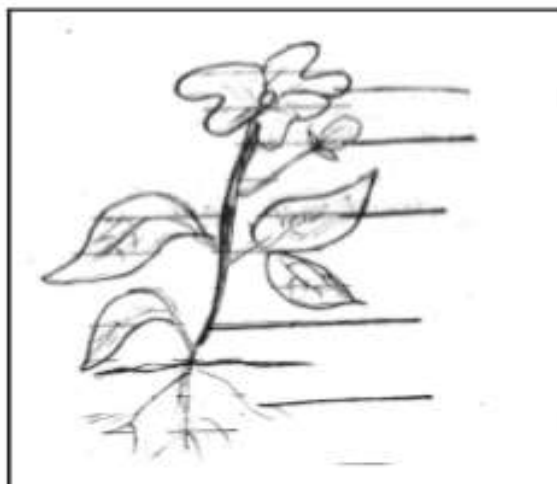
1. Make a chart about some food items with their ingredients.
2. Classify the animals according to their food habit with 3-3 examples.
3. Put moong & chana seeds into the water. What happens after 10-12 hrs.

### Food-Where does it come from

1. Define the following terms with suitable example -

- (a) Herbivores .....
- b. Carnivores .....
- c. Omnivores .....
- d. Ingredients .....

2. Label the parts of plant



3. Q. Fill in the blanks

1. A small white structure that comes out of the seeds is called .....
2. Bees collect ..... from flowers and convert it into .....
3. Dog eats plant and animal products so, is called .....

4 Q. Complete the table.

	Plant	Plant part used as food.
1	Tomato	.....
2	.....	Root
3	Turmeric	.....
4	Sugarcane	.....
5	.....	Seed
6	Spinach	.....
7	.....	Fruit
8	.....	Leaf

5.Q Write true and false against each statement

Ans.

- i) Milk and meat are animal products.
- ii) All living beings need same kind of food
- iii) Lions and Tigers are herbivores.
- iv) Leaves and seeds of mustard plant used as food items.

### Components of Food

- 1) Fill in the blank .
  - i) Food ingredients contain some components that are needed by our body. These components are needed by our body. These components are called \_\_\_\_\_.
  - ii) Starch and sugars are source of \_\_\_\_\_.
  - iii) Ground nut is rich in \_\_\_\_\_.
  - iv) Pulses and soyabean are source of \_\_\_\_\_.
  - v) The diet rich in all the nutrients is called \_\_\_\_\_.
  - vi) Disease that occur due to lack of nutrients over a long period are called \_\_\_\_\_.

2) Match the coloum.

A Vitamin/ Mineral A B C D Iodine Calcium Iron	B Deficiency Disease Beriberi Bone and tooth decay Rickets Anaemia Scurvy Goiter Loss of vision
--	---

3) Define Obesity ?

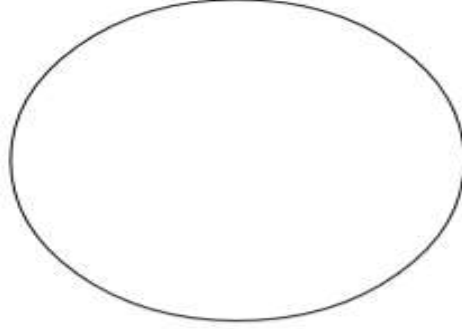
.....

4) What is roughage ?

.....

5) Define Balanced Diet ?

6. Draw some sources of carbohydrates.



7. Draw some plant and animal sources of protein.



Plant Source  
(Proteins)



Animal Source  
(Proteins)

8) Tick (✓) the statements that are correct.

1. Protein is a body building food.
2. Vitamin C gets easily destroyed by heat during cooking.
3. Our body does not need dietary fibre and water.

## हिंदी (Hindi)

### बसंत

पाठ 1 वह चिड़िया जो

पाठ 2 बचपन

1. पाठ का वाचन कर के कठिन शब्द लिखना
2. पुस्तक में अंतिम पेज पर दिए हुए 20 शब्दार्थ याद करके लिखना

### परियोजना

1. एक स्वरचित कविता लिखिए
2. वह चिड़िया जो कविता पढ़कर चिड़िया का जो चित्र आपके मन में उभरता है उसे बनाइए

### व्याकरण

1. संज्ञा व सर्वनाम की परिभाषा व छांटना
2. भाषाएं व उनकी लिपियां।
3. प्रश्नवाचक विराम चिन्ह

**अनुच्छेद** वर्तमान समय का सदुपयोग



# MATHEMATICS

**Chapter 1:** Knowing our numbers.

## **Topics:-**

1. Comparing the numbers.
2. Indian and International system of numeration.
3. Estimation
4. Roman numbers.

## **Activity:-**

Do exercise 1.1 , 1.2 and 1.3 in your copy

## **Project:-**

Find the population of top 5 highly populated states of India. Write them in both Indian and International place value chart